

Name: _____

Homework for the week of February 20, 2017:

Complete the five assignments and return them in the folder on Friday.

- 1. Please cut up the sight words in this packet and make flash cards out of them to practice each night. Please go over all sight words each night for the assessments each Friday. Do not turn in the sight words with the packet.**
- 2. We are working with word families for homework. Complete the word family activity for -an word family.**
- 3. Complete 5 sentences choosing words from the -an word family your child used in the activity in number 2.**
- 4. Complete the math activities practicing addition front and back.**
- 5. We will learn a nursery rhyme “One Two, buckle my shoe,” this week. Please have your child color the coloring sheet and practice the nursery rhyme each night. They will have the chance to say the nursery rhyme as part of the homework packet.**

... ..

... ..

... ..

... ..

... ..

... ..

Name: _____


down

day

did

get

come



Write 5 sentences with 5 words using fairy words



Always do your best!

Handwriting practice line with a cloud, a small figure, and a large number 1.

Handwriting practice line with a cloud, a small figure, and a large number 2.


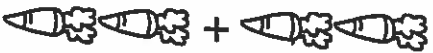

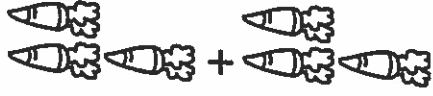

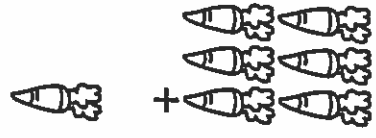
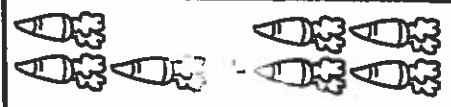
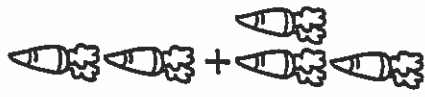
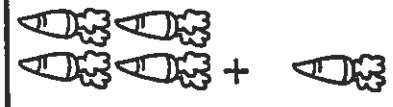
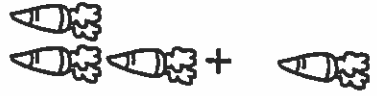
Handwriting practice line with a cloud, a small figure, and a large number 3.

Handwriting practice line with a cloud, a small figure, and a large number 4.

Handwriting practice line with a cloud, a small figure, and a large number 5.

Counting Carrots

Write how many are in the set. Add.

| | |
|--|---|
|  _____ + _____ = _____ |  _____ + _____ = _____ |
|  _____ + _____ = _____ |  _____ + _____ = _____ |
|  _____ + _____ = _____ |  _____ + _____ = _____ |
|  _____ + _____ = _____ |  _____ + _____ = _____ |
|  _____ + _____ = _____ |  _____ + _____ = _____ |




Name _____

Skill: Addition facts to 10


Write how many in all.

1.



$6 + 4 = \underline{\quad}$

2.




$4 + 6 = \underline{\quad}$

3.



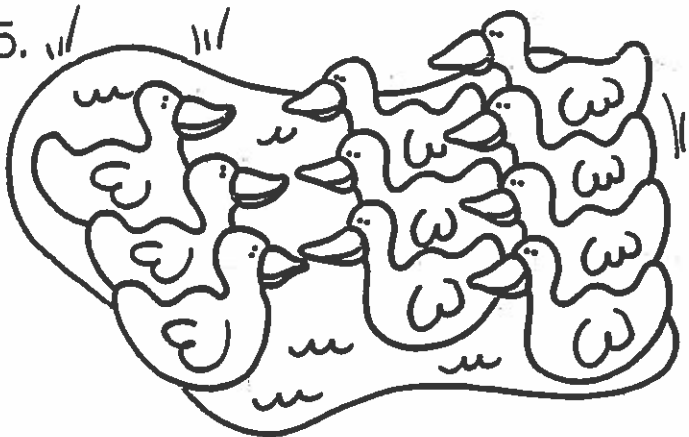
$1 + 8 = \underline{\quad}$

4.



$8 + 1 = \underline{\quad}$

5.



$3 + 7 = \underline{\quad}$

6.



$7 + 3 = \underline{\quad}$

* **Bonus:** On the back, draw a picture to show $9 + 1 = 10$ and $1 + 9 = 10$.

One Two, Buckle My Shoe

1, 2

One, two, buckle my shoe;

3, 4

Three, four, knock at the door;

5, 6

Five, six, pick up sticks;

7, 8

Seven, eight, lay them straight;

9, 10

Nine, ten, a good fat hen.

